

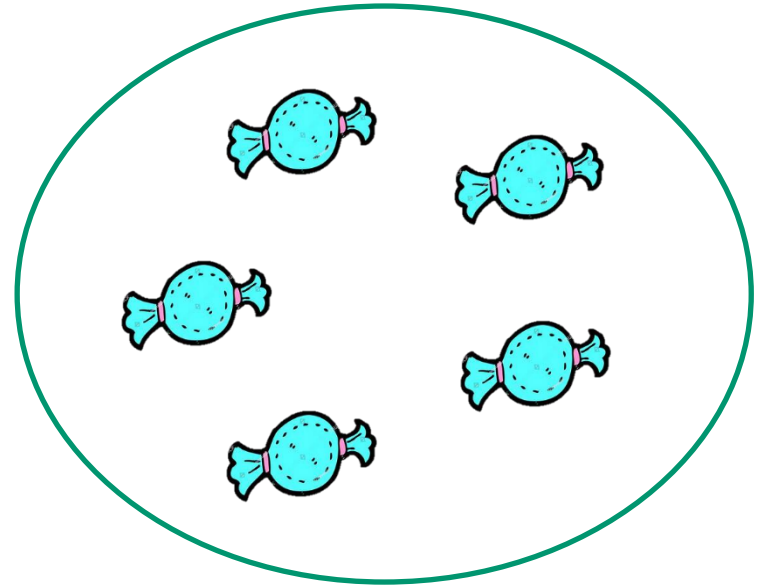
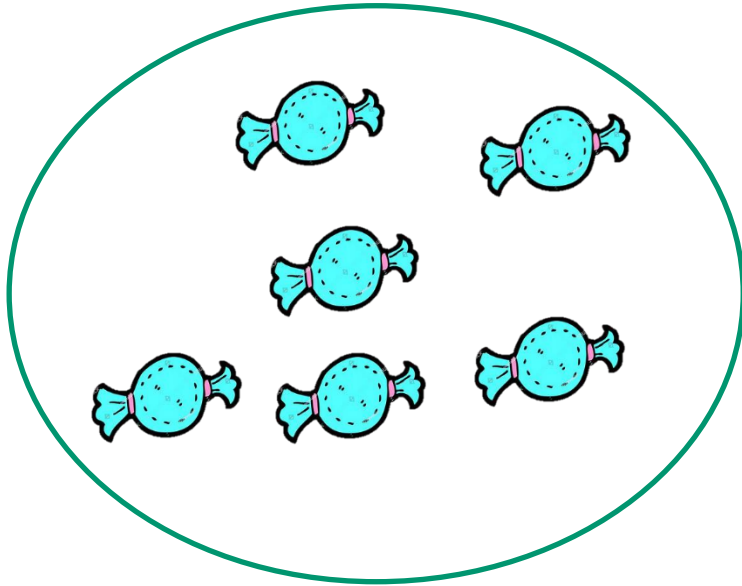
Good morning Year One! 😊

It is not necessary to print out all of these slides so please read them through carefully so you can decide exactly which are needed as a paper copy.

Thank you.

Session 4

OMS: Can you write 2 addition number sentences for these groups of sweets?



WALT: Begin to recognise family addition facts.

WALT: Identify key facts and solve worded problems

If you had 3 dogs and 6 cats, how many animals would you have altogether?



Write your addition sentence in two different ways.







My 0 to 30 Number Line



0 1 2 3 4 5 6 7 8 9 10 11 12 13 14 15 16 17 18 19 20 21 22 23 24 25 26 27 28 29 30



If you had 4 buses and 2 cars, how many vehicles would you have altogether?



How else can you write this addition sentence?



My 0 to 30 Number Line



My 0 to 30 Number Line




1	2	3	4	5	6	7	8	9	10
11	12	13	14	15	16	17	18	19	20
21	22	23	24	25	26	27	28	29	30
31	32	33	34	35	36	37	38	39	40
41	42	43	44	45	46	47	48	49	50
51	52	53	54	55	56	57	58	59	60
61	62	63	64	65	66	67	68	69	70
71	72	73	74	75	76	77	78	79	80
81	82	83	84	85	86	87	88	89	90
91	92	93	94	95	96	97	98	99	100

(If needed)

WALT: Begin to recognise family addition facts.

WALT: Identify key facts and solve worded problems



Kade the giraffe has 5 spots. Harrison the giraffe has 3 spots.
How many spots are there in total?



Louis had 7 cars. Lottie gave him 4 more.
How many cars has he got altogether?



Harlie catches 9 mice and his friend Karter catches 2 more.
How many do the cats have altogether now?



Lana bakes 8 cookies for her friends. Lida bakes 4 more.
How many cookies do the girls have in total?



WALT: Begin to recognise family addition facts.

WALT: Identify key facts and solve worded problems



Cole the giraffe has 15 spots. Hayden the giraffe has 4 spots.
How many spots are there in total?



Jessica had 17 cars. Robyn gave her 2 more.
How many cars has he got altogether?



Anaira catches 9 mice and her friend Reuben catches 8 more.
How many do the cats have altogether now?



Lennon bakes 12 cookies for his friends. Joseph bakes 6 more.
How many cookies do the boys have in total?



WALT: Begin to recognise family addition facts.

WALT: Identify key facts and solve worded problems



Oliver the giraffe has 15 spots. Arun the giraffe has 9 spots.
How many spots are there in total?



Mia had 17 cars. Evelyn gave her 12 more.
How many cars has he got altogether?



Jia catches 12 mice and her friend Ebony catches 9 more.
How many do the cats have altogether now?




Sam bakes 23 cookies for his friends. Shayne bakes 4 more.
How many cookies do the boys have in total?



WALT: Begin to recognise family addition facts.

WALT: Identify key facts and solve worded problems



Jonah the giraffe has 13 spots. Cecily the giraffe has 9 spots.
How many spots are there in total?



Layla had 27 cars. Rhea gave her 12 more.
How many cars has he got altogether?



Amaya catches 23 mice and her friend Emmie catches 11 more.
How many do the cats have altogether now?




Marcus bakes 19 cookies for his friends. Bettie bakes 8 more.
How many cookies do the boys have in total?



WALT: Begin to recognise family addition facts.

WALT: Identify key facts and solve worded problems



Noah the giraffe has 28 spots. Billie the giraffe has 9 spots.
How many spots are there in total?



Erin had 21 cars. Amelia gave her 12 more.
How many cars has he got altogether?



Hannah catches 32 mice and her friend George catches 21 more.
How many do the cats have altogether now?



Teddy bakes 29 cookies for his friends. Kate bakes 18 more.
How many cookies do the boys have in total?



Plenary:

More than, less than or equal to?

12		$6+3$
----	--	-------



More than, less than or equal to?

15

$9+6$

twinkl

My 0 to 30 Number Line



0 1 2 3 4 5 6 7 8 9 10 11 12 13 14 15 16 17 18 19 20 21 22 23 24 25 26 27 28 29 30



More than, less than or equal to?

8

$$7 + 4$$

twinkl My 0 to 30 Number Line



0 1 2 3 4 5 6 7 8 9 10 11 12 13 14 15 16 17 18 19 20 21 22 23 24 25 26 27 28 29 30

